



# All About The UK Atlas Activity



Label each numbered place with the correct name.



1) E \_\_\_\_\_

2) L \_\_\_\_\_

3) S \_\_\_\_\_

4) E \_\_\_\_\_

5) W \_\_\_\_\_

6) C \_\_\_\_\_

7) N \_\_\_\_\_ I \_\_\_\_\_

8) B \_\_\_\_\_

9) N \_\_\_\_\_ A \_\_\_\_\_ O \_\_\_\_\_

10) N \_\_\_\_\_ S \_\_\_\_\_

11) I \_\_\_\_\_ S \_\_\_\_\_

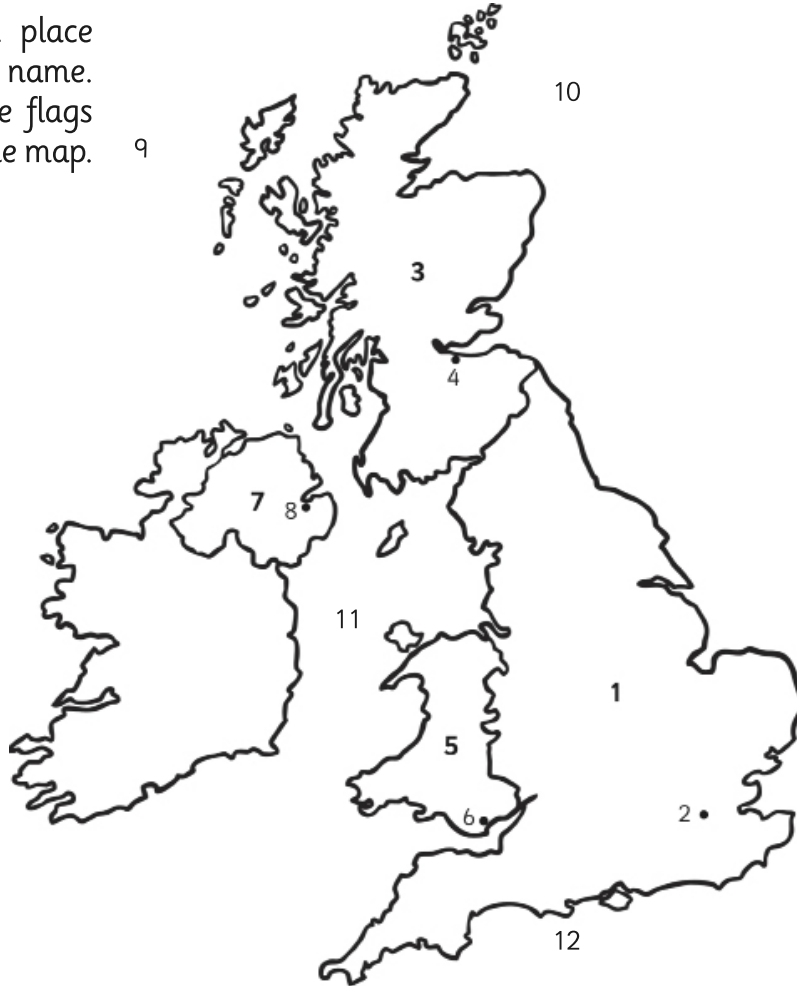


12) E \_\_\_\_\_ C \_\_\_\_\_



# All About The UK Atlas Activity



Label each numbered place with the correct name.  
In the boxes, draw the flags of the 4 countries on the map.



1)

7)

2)

8)

3)

9)

4)

10)

5)

11)

6)

12)



# All About The UK Atlas Activity



Label each numbered place with the correct name. Using the boxes, draw the national flag of each country, along with a national emblem (an object linked with the country) underneath.

- |    |     |
|----|-----|
| 1) | 7)  |
| 2) | 8)  |
| 3) | 9)  |
| 4) | 10) |
| 5) | 11) |
| 6) | 12) |